

Şekil Sayı Eşleştirme

×

= 7

◇

= 4

+

= 1

▽

= 8

⬠

= 9

□

= 0

→

= 3

△

= 5

☆

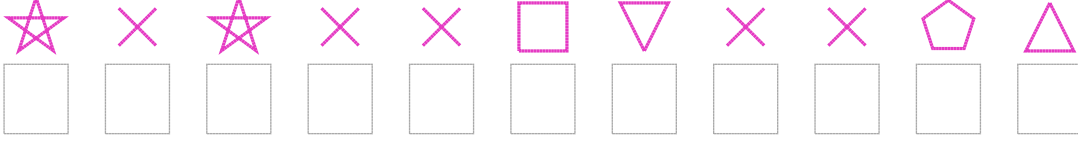
= 6

○

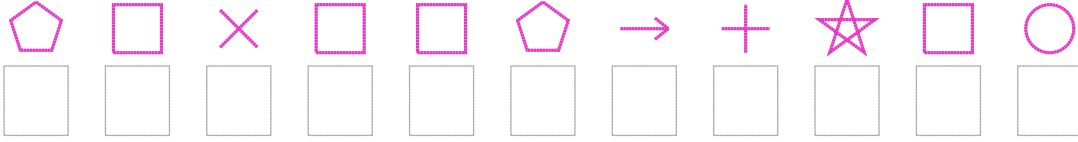
= 2

Aşağıdaki uzun şifreleri hatasız çözerek altlarına yazın:

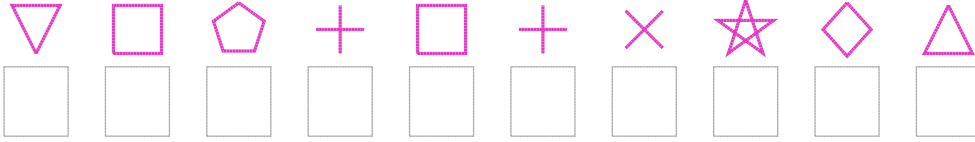
1. Şifre



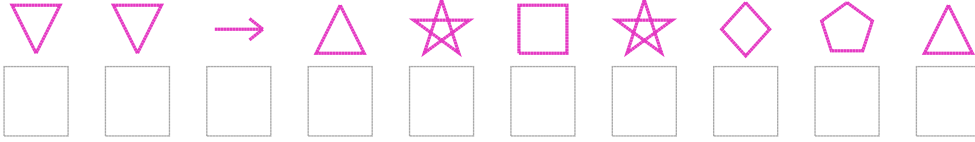
2. Şifre




3. Şifre



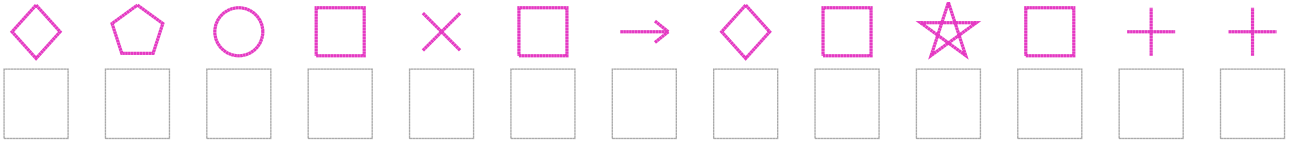
4. Şifre



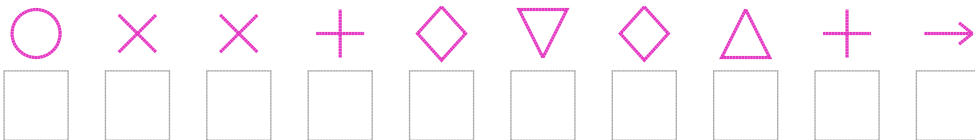
5. Şifre



6. Şifre



7. Şifre



□ BONUS: 2. ve 1. şifrenin üçüncü rakamının toplamı kaçtır?

Cevap Anahtarı

1. Şifre: 67677087795
2. Şifre: 90700931602
3. Şifre: 8091017645
4. Şifre: 8835606495
5. Şifre: 76661629581
6. Şifre: 4920703406011
7. Şifre: 2771484513

□ Bonus Soru Cevabı: 13